


PURCHASE


KS1 – 2003 Paper 1

1.

9 Ella wants to buy one banana.



She has **20p**



How much **more** money does she need? p


KS1 – 2007 Paper 1

2.

19 Lee buys **two** of these things to eat.

He spends **£1** altogether.

Tick (✓) the **two** things he buys.



70p



40p



50p



30p





Jack wants to buy a bike that costs **£107**

He saves **£10** each Saturday.

How many Saturdays will it take him to save enough to buy the bike?

Saturdays

15 A shop sells these sweets.



2p




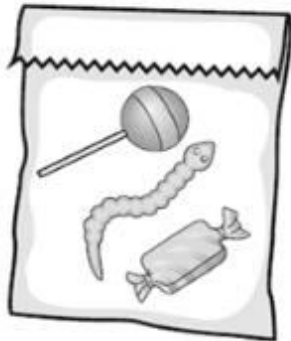
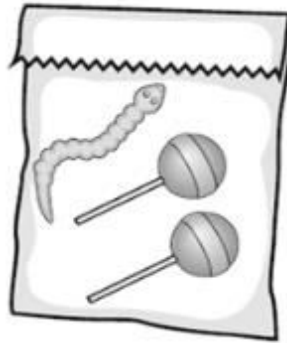
5p



10p

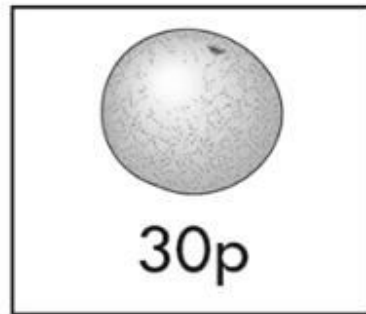
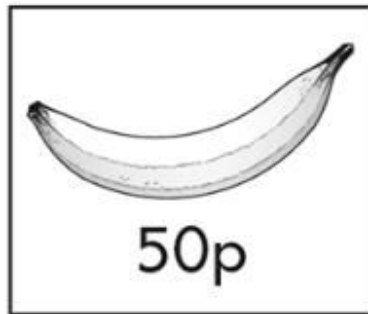
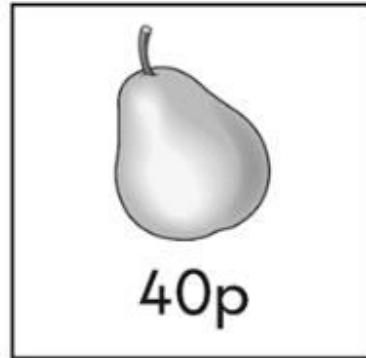
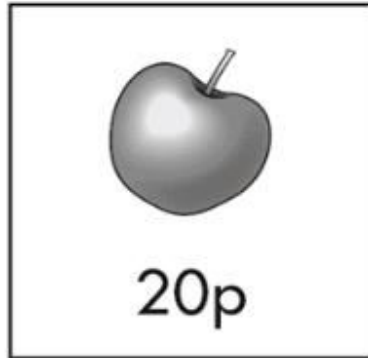
Abdul spends exactly **20p** on sweets.

Tick (✓) the bag of sweets he buys.



22

Look at these four fruits.



Kemi buys **three different** fruits.

She spends exactly **£1**

Tick the **three** fruits that she buys.

1 mark

8 A game costs £25

Ben has £19



How much **more** money does Ben need to buy the game?

1 mark

KS1 – 2018 Paper – Reasoning

7.

24



biscuits
20p each



cakes
25p each

Sam buys **3** biscuits and **1** cake.

How much does Sam spend **altogether**?

2 marks